

HOME LEARNING

Subject: chemistry option

Time: 30 minutes

Learning Objective: Food chain and food webs

Mrs Baker's class:




answer questions:

Food Chains

Organism
Producer
Consumer
Predator
Prey
Top predator

An animal which is eaten by another animal
An animal which is
And organism which obtains nutrients by consuming another organism
An animals which eats another animals
A green plant at the start of a food chain
Any living thing – plant or animal

Label the following organisms in the food chain using words given above.



1. Where do the producers ~~get their energy~~ from? _____

2. What do the arrows tell us in a food chain?

Create your own food chain

GCSE task: food chains and food webs

Save your work:

If you are using a computer, open a blank document to do your work (you can use Word or Publisher). Don't forget to SAVE it with your name, the lesson you are doing and the date.

For example: T.Smith Maths 8 April

If you would like us to see or mark your work please email it or send a photo of your completed work to:

BBaker@glebe.bromley.sch.uk

Thank you